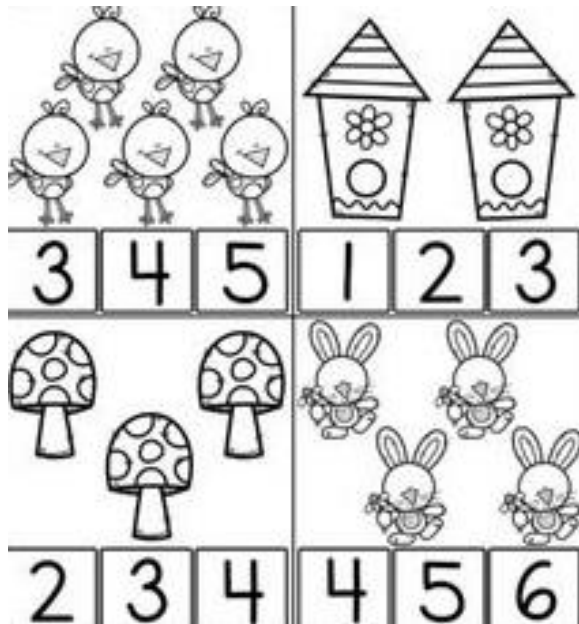


1. Zaznač počet.



2. Vypočítaj

$3-1= \underline{\quad}$

$1+1= \underline{\quad}$

$2-1= \underline{\quad}$


$3-1= \underline{\quad}$

$2+1= \underline{\quad}$

$3-2= \underline{\quad}$

$2+2= \underline{\quad}$

3. Doplň správné číslo do číselného radu a nakresli daný počet vedľa.



6.VP

1. Vypočítaj.

$1+1=$  \_\_\_

$2-1=$  \_\_\_

$1+2=$  \_\_\_

$3-2=$  \_\_\_

$2+1=$  \_\_\_

$3-1=$  \_\_\_

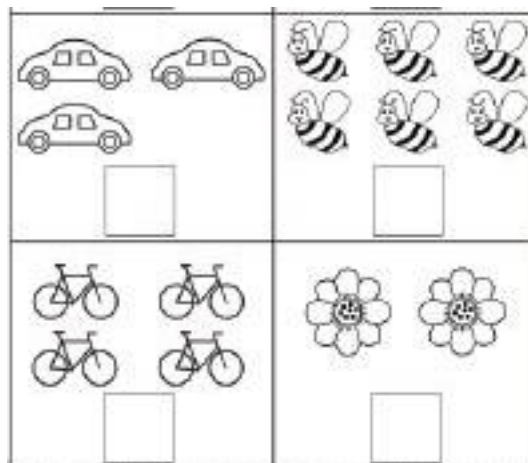
$1+1=$  \_\_\_

$2-1=$  \_\_\_

$3+1=$  \_\_\_

$3-2=$  \_\_\_

2. Napíš správny počet.




3. Zopakuj si písanie číslic zo zajačikmi.

1




1	1	1	1	1	1	1	1
1	1	1	1	1	1	1	1

2






2	2	2	2	2	2	2	2
2	2	2	2	2	2	2	2


3



3	3	3	3	3	3	3	3
3	3	3	3	3	3	3	3

## 6.VP

1. Vyfarbi  červenou,  
 modrou,  zelenou.



2. Vypočítaj.

$1+1= \underline{\quad}$

$2-1= \underline{\quad}$

$1+2= \underline{\quad}$

$3-2= \underline{\quad}$

$2+1= \underline{\quad}$

$3-1= \underline{\quad}$

$1+1= \underline{\quad}$

$2-1= \underline{\quad}$

$3-1= \underline{\quad}$

$2+1= \underline{\quad}$

$3-2= \underline{\quad}$

$2+1= \underline{\quad}$

$3-1= \underline{\quad}$

$1+1= \underline{\quad}$

$2-1= \underline{\quad}$

2. Dopln' číselný rad.

1,   , 3,   , 5

  , 2,   , 4, 5

3. Prepíš čísla





1            3           

2            4           

4. Nakresli 4 lopty.

## 6.VP

1. Vyfarbi správný počet.

	2 1 3
	1 5 4
	2 4 3
	3 5 2

2. Prepíš čísla

1 \_\_\_\_\_

2 \_\_\_\_\_

3 \_\_\_\_\_

4 \_\_\_\_\_

6.VP

1. Dokresli geometrické útvary a pojmenuj ich.

